

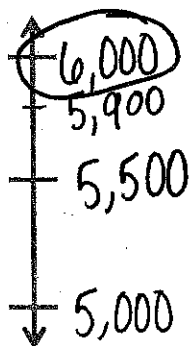
Due Friday, October 6

Name Answer Key

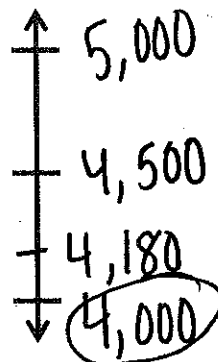
Date _____

1. Round to the nearest thousand. Use the number line to model your thinking.

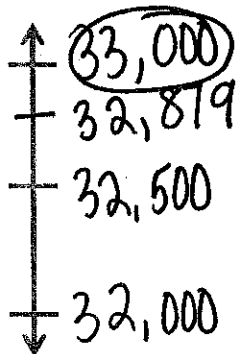
a. $5,900 \approx \underline{6,000}$



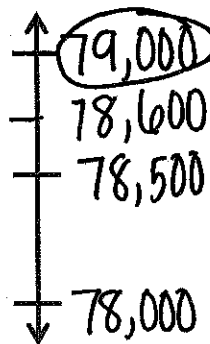
b. $4,180 \approx \underline{4,000}$



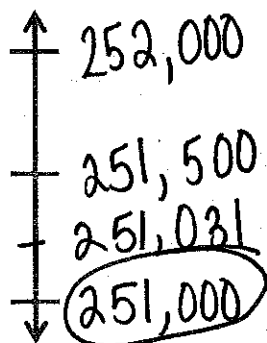
c. $32,879 \approx \underline{33,000}$



d. $78,600 \approx \underline{79,000}$



e. $251,031 \approx \underline{251,000}$



f. $699,900 \approx \underline{700,000}$

